

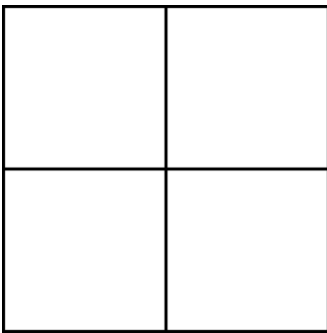
24 Days of Puzzles

Day 7 – Counting Squares

Today's puzzle is simple to state but prove more challenging than it looks. In each of the three puzzles, just count the number of any-sized squares. Just as a hint, the number of squares in the Puzzle 1 is NOT 4!

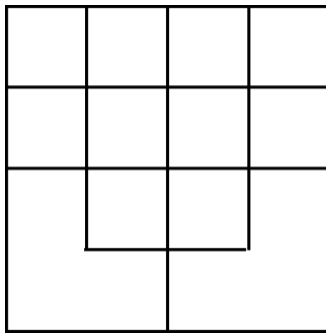
Good Luck!

Puzzle 1



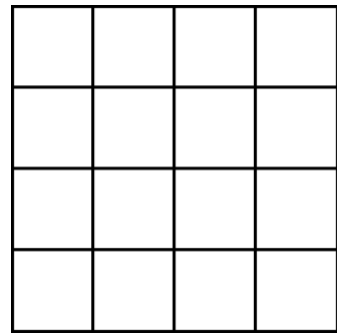
How many squares can you count?

Puzzle 2



How many squares can you count?

Puzzle 3



How many squares can you count?